

Name \_\_\_\_\_

Date \_\_\_\_\_



# TELLING THE TIME - O'CLOCK SHEET 1

Write the correct time underneath each clock. The first one has been done for you.

2 o'clock	___ o'clock	___ o'clock
___ o'clock	___ o'clock	___ o'clock

When the time is an o'clock, which number does the big hand point to?

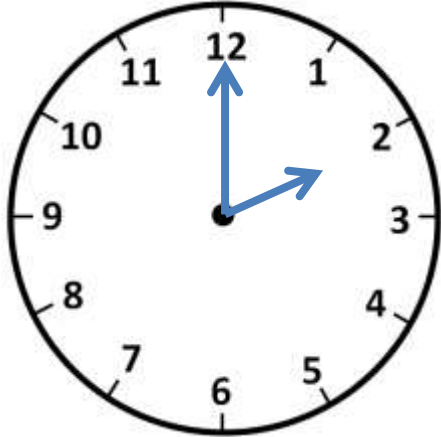
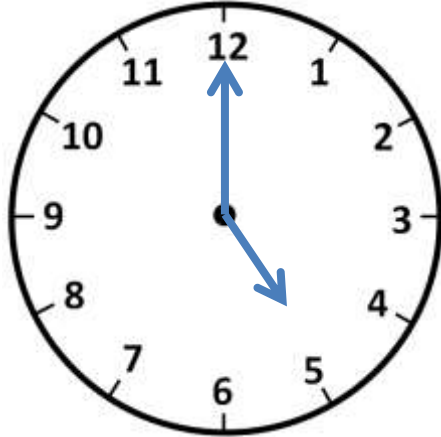
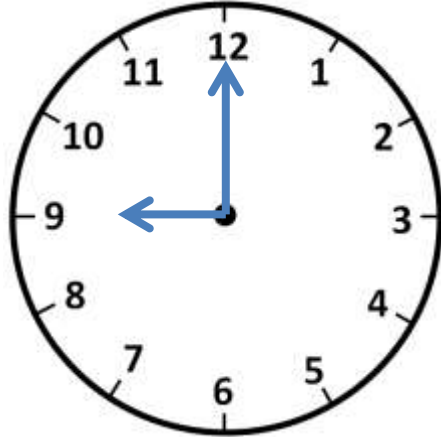
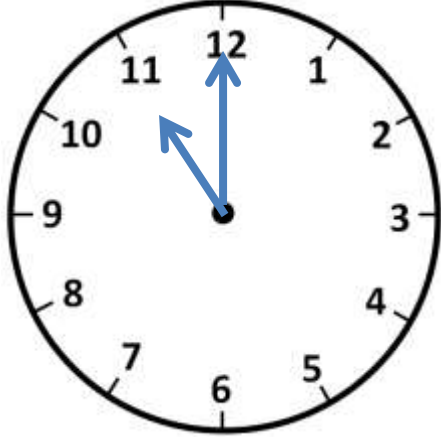
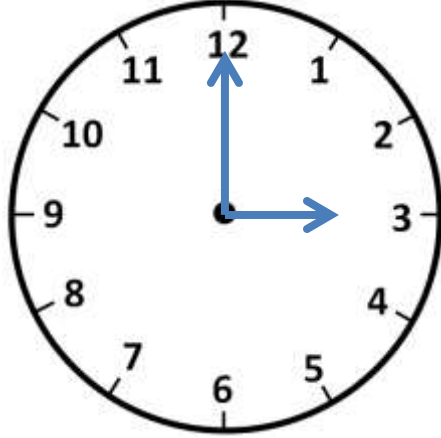
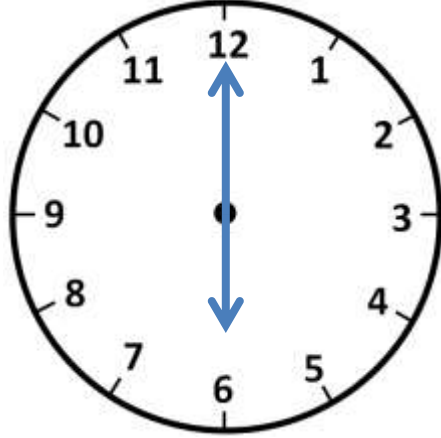


Name

Date



# TELLING THE TIME - O'CLOCK SHEET 1 ANSWERS

		
2 o'clock	<u>5</u> o'clock	<u>9</u> o'clock
		
<u>11</u> o'clock	<u>3</u> o'clock	<u>6</u> o'clock

When the time is an o'clock, which number does the big hand point to?

Answer 12

