



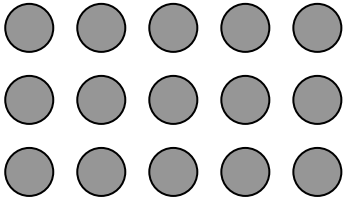






Multiplication Arrays



Name: _____

Date: _____

- Write in the multiplication calculations that go with the following arrays. The first one has been done for you.

 <input type="text" value="4 x 2 = 8"/> <input type="text" value="2 x 4 = 8"/>	 <input type="text"/> <input type="text"/>	 <input type="text"/> <input type="text"/>
 <input type="text"/> <input type="text"/>	 <input type="text"/> <input type="text"/>	 <input type="text"/> <input type="text"/>
 <input type="text"/> <input type="text"/>	 <input type="text"/> <input type="text"/>	 <input type="text"/> <input type="text"/>